

BHARTIYA SHIKSHA BOARD
UNIT TEST – TERM I
MATHEMATICS – CLASS I
SESSION 2026-27

Time: 1 Hour

Max Marks: 20

GENERAL INSTRUCTIONS:

- Read the questions carefully.
- Please check that this sheet contains **02** printed pages.
- **10** minutes of extra time has been allotted for the teacher to explain the questions to the students. During this time, students will not start writing the answers.
- This sheet contains **08** questions. Attempting all the questions is compulsory.

Q1. Look at the picture idea and circle the correct word.

(4 marks)



- (a) The bird is above / below the hut.
- (b) The dog is near / far from the tree.
- (c) The ball is under / on the table.
- (d) The kite is above / under the boy.

Q2. Tick (✓) the correct option.

(2 marks)

(a) We throw waste _____ the dustbin.

Inside

Outside

(b) We keep our books _____ the table.

On

Under

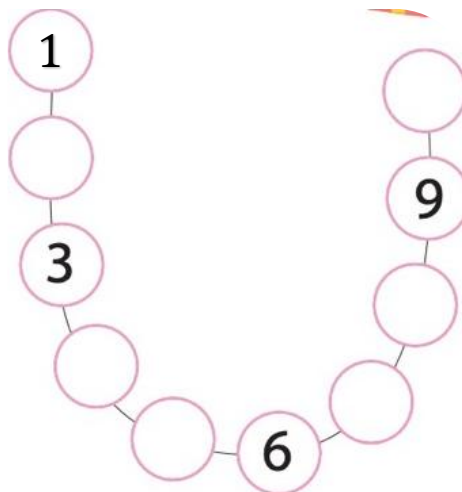
Q3. Match the objects with their shapes.

(4 marks)

A	B
	
	
	
	

Q4. Think and write the missing numbers.

(3 marks)



Q5. Circle the group which is more in number.

(1 mark)





Q6. Circle the group which is less in number.

(1 mark)



Q7. Circle the pictures which have zero number of things.

(2 marks)



Q8. Answer the following.

(3 marks)

<p>Number of Birds inside the cage <input type="text"/></p>	<p>Number of Birds inside the cage <input type="text"/></p>	<p>Number of Birds inside the cage <input type="text"/></p>
---	---	---